



# How Many Water Beads?


How many water beads fit in 1 cup?




How many water beads fit in  $1/2$  cup?




How many water beads fit in  $1/3$  cup?




How many water beads fit in  $1/4$  cup?



How many water beads fit in  $1/8$  cup?



How many water beads fit in 1 Tablespoon?



How many water beads fit in 1 teaspoon?

